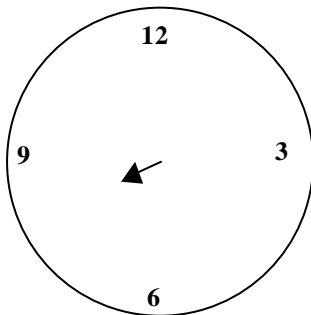
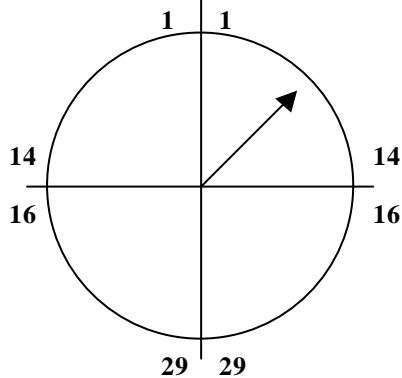
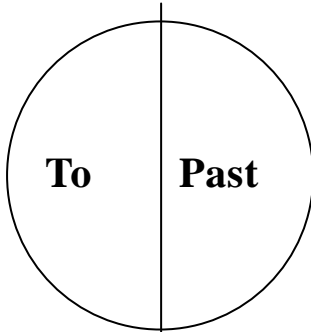




# Time



## Rules

- 1) Read the long hand in minutes
- 2) In which half is it? Past or To?
- 3) Read the short hand in hours

10 minutes past 8

**0 = Hours + o'clock**

**15 = a quarter past + hours**

**30 = half past + hours**

**45 = a quarter to + hours**

**In the morning**

**In the afternoon**

**In the evening**

**At night**

**20:22**

**twenty-two minutes past eight in the  
evening (at night)  
eight twenty-two in the evening (at night)**